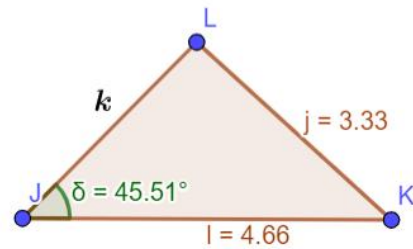
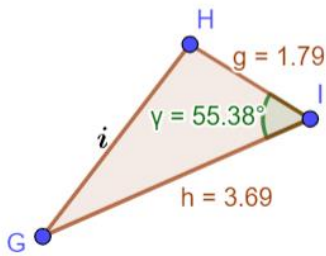
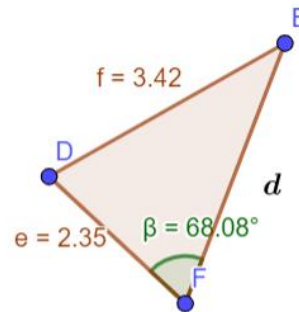
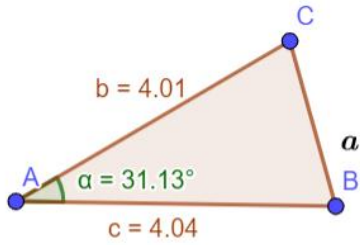


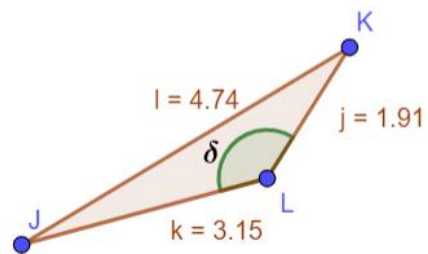
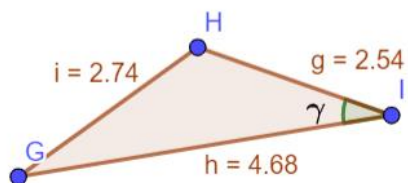
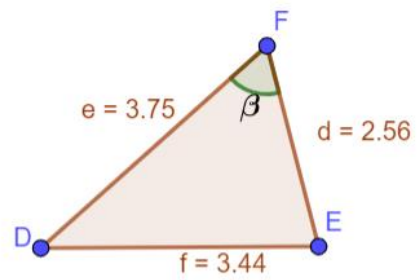
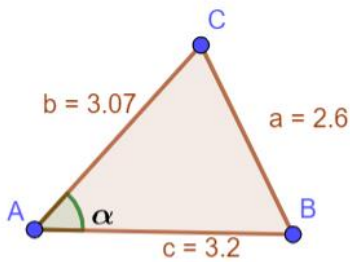
Lista de Exercício – sobre Lei do Cossenos

1. Observe as figuras abaixo e obtenha os valores de a, d, i e k .



Resposta: $a = 2.16, d = 3.51, i = 3.05$ e $k = 3.13$

2. Observe as figuras abaixo e obtenha os valores de α, β, γ e δ .



Resposta: $\alpha = 48.98^\circ, \beta = 62.71^\circ, \gamma = 28.63^\circ$ e $\delta = 137.29^\circ$